



INDIAN SCHOOL AL WADI AL KABIR

DEPARTMENT OF MATHEMATICS (2023-2024)

TOPIC: SUBTRACTION

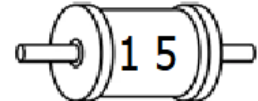
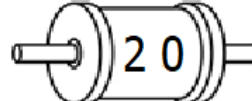
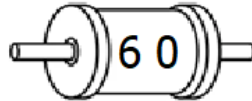
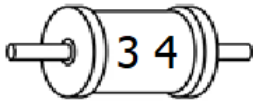
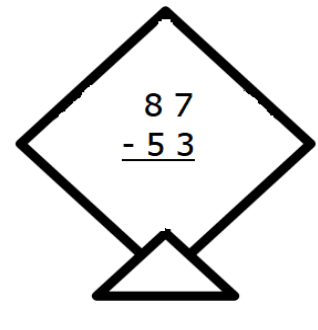
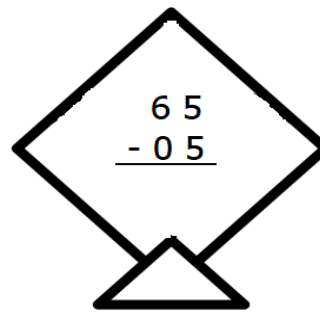
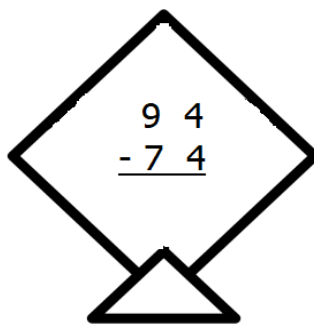
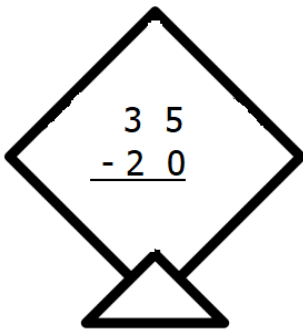
RECALL WORKSHEET

RESOURCE PERSON: Ms. ANJALI BARLA

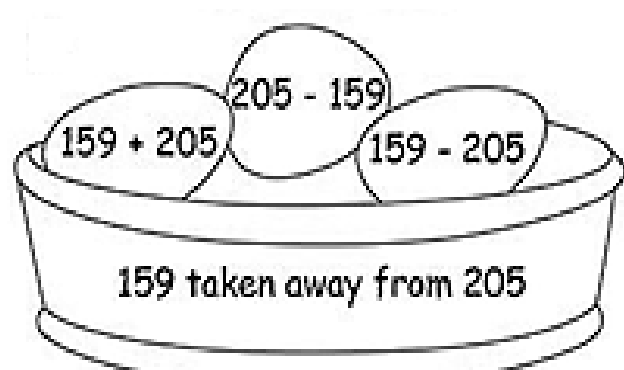
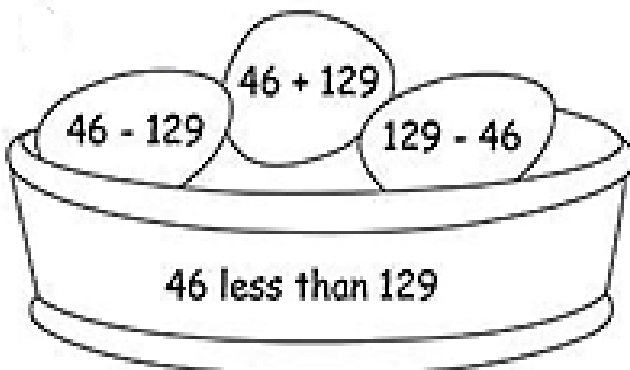
NAME: _____ CLASS: III SEC: _____ DATE: _____

Read the instructions and do as directed.

I. Subtract and then connect the following pictures of kites to the correct spindles.



II. Choose and colour the correct option for the subtraction statement written on the basket.




III. Subtract the following.

	T	O			T	O
	5	0			4	6
—	2	3		—	2	8


IV. Solve the given story sum.

- a. On her birthday, Simi bought a packet of 80 cookies. She distributed 36 cookies among her friends. How many cookies are left with her?



Number of cookies Simi bought =	
Number of cookies she distributed =	
Number of cookies left with her =	
Ans: _____ cookies	

- b. Tina had 9 sweets. She gave 4 sweets to her brother. How many sweets are left with her? Shade and show the number of sweets left with her.



Number of sweets left with Tina: $9 - 4 =$ _____